

Name:

Date:

Year 7 How Developed is Nigeria?

Study figure 1, a table showing life expectancy in Nigeria.

1. In which year were the...

...Highest life expectancy _____

...lowest life expectancy _____

2. How many years was the life expectancy

• 46 years: _____

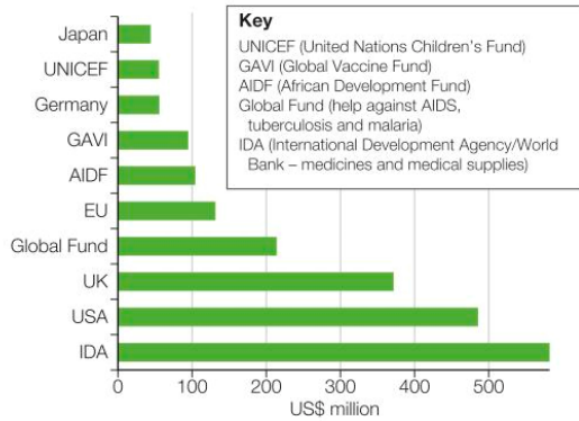
• Over 46: _____

(4 marks)

Figure 1 Life Expectancy in Nigeria 1980 - 2015

Life Expectancy	1980	1985	1990	1995	2000	2005	2010	2015
Years	45	46	46	46	48	49	51	53

Figure 2



Sources of aid to Nigeria in 2014

Study figure 2, a bar chart to show who gives Nigeria aid (Money)

How much money did the UK give _____

Which COUNTRY gave the most money _____

Which COUNTRY gave the least money _____

What does UNCEF stand for _____

(4 marks)

Study figure 3 and answer the following questions

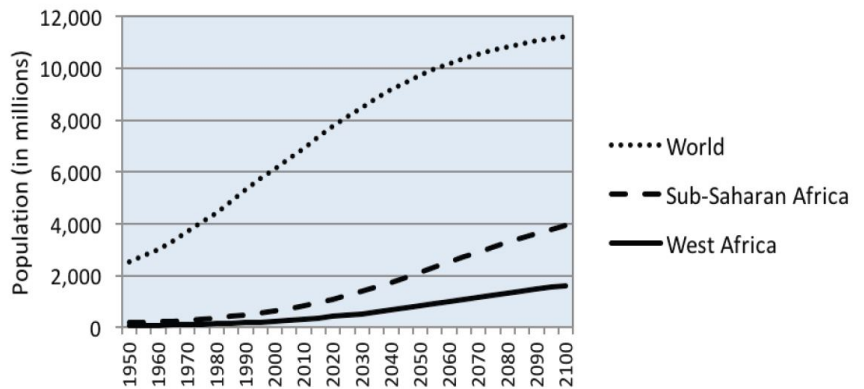
7. What is the world's projected population by 2100? _____

8. What year is Sub-Saharan Africa's population projected to be over 2000 _____

9. What is the projected difference in population between the two African Regions in 2100 _____

(4 marks)

Projected population growth from 1950 to 2100



10. What might the problems be if the population continues to grow.

(3 marks)

Section 3: Describing Explaining



Using the photo to help you, Describe the conditions in the Shanty Towns

UK DEVELOPMENT RESULTS / UPDATE 2016

NIGERIA

COUNTRY CONTEXT

60m 60 million people live below the national poverty line (source: World Bank)

152nd Nigeria ranks 152nd out of 187 in the Human Development Index

Population: 182 million

IN 2015-16 DFID'S BILATERAL PROGRAMME SPEND WAS £213 MILLION

Thanks to UK aid

Results and achievements between 2011-15 include:

<p>EDUCATION</p> <p>450,000 CHILDREN supported by DFID in primary and lower secondary education</p>	<p>JOBS AND GROWTH</p> <p>14.6 MILLION PEOPLE with access to financial services as a result of DFID support</p>
<p>WATER, SANITATION, HYGIENE</p> <p>840,000 PEOPLE with sustainable access to clean drinking water sources through DFID support</p>	<p>HEALTH</p> <p>6.4 MILLION children under five and pregnant women reached through DFID's nutrition-relevant programmes</p>
<p>2.9 MILLION PEOPLE with sustainable access to an improved sanitation facility through DFID support</p>	<p>10,000 ADDITIONAL WOMEN helped to access modern methods of family planning</p>
<p>5.1 MILLION PEOPLE with access to improved hygiene through DFID support to hygiene promotion</p>	<p>780,000 BIRTHS delivered with the help of skilled personnel</p>

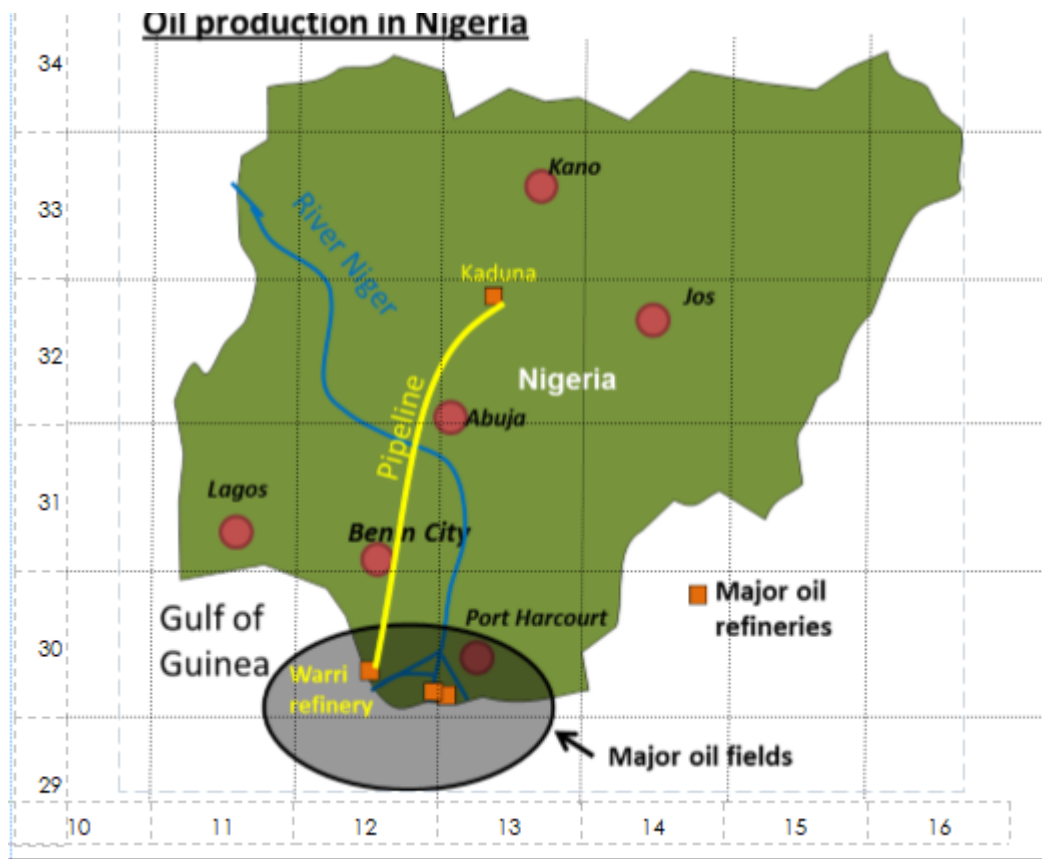
#GlobalBritain

(4 marks)

25. Using the information above to help you, Explain how aid has helped improve conditions in Nigeria

(4 marks)

Section 2: Map Skills



Basic Map Interaction:

(4 marks)

- 11. Name the River running through Nigeria _____
- 12. Which city is the furthest South? _____
- 13. Which city is furthest North? _____
- 14. What direction is Port Harcourt from Kano? _____

4 Figure Grid References: What is the 4 figure grid references

(4 marks)

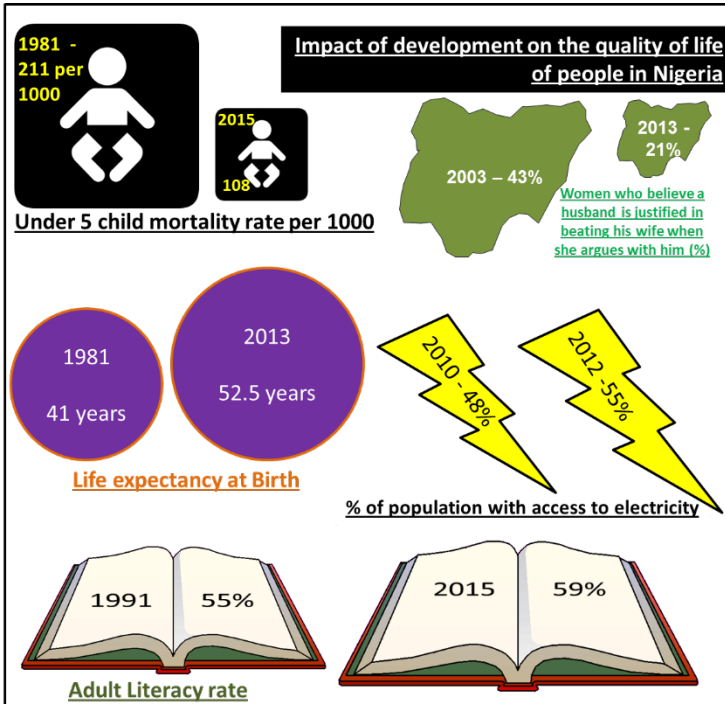
- 15. for the 4 squares that the major oil fields are in _____

6 Figure Grid References: What is the 6 figure grid reference of...

(4 Marks)

- 19: ...Lagos? _____
- 20: ...Jos? _____
- 21: ...Port Harcourt? _____
- 22: ...Kano? _____

Section 4: Evaluation



Q 26 "There have been huge improvements in the Quality of Life in Nigeria". How far do you agree with this statement?

- Include an introduction– Where is Nigeria and what is it like.
- Include information about improvements that have been made.
- Include information about problems that still exist.
- Come to a conclusion– Overall do you agree